

MCC.2.OA.1

# SURF INTO

## ONE *and* TWO STEP word problems



2<sup>nd</sup> Grade  
24 Task Cards & Scoot Game!

By: Brianna Johnson

Name: \_\_\_\_\_

Date: \_\_\_\_\_

# SCOOT

1.	2.	3.	4.
5.	6.	7.	8.
9.	10.	11.	12.

Name: \_\_\_\_\_

Date: \_\_\_\_\_

# SCOOT

1.	2.	3.	4.
5.	6.	7.	8.
9.	10.	11.	12.

Name: \_\_\_\_\_

Date: \_\_\_\_\_

# SCOOT

1.	2.	3.	4.
5.	6.	7.	8.
9.	10.	11.	12.


Name: \_\_\_\_\_

Date: \_\_\_\_\_

# SCOOT

1.	2.	3.	4.
5.	6.	7.	8.
9.	10.	11.	12.

# ANSWER KEY




## Set 1

1. 8
2. 61
3. 74
4. 18
5. 112
6. 23
7. 47
8. 44
9. 38
10. 51
11. 19
12. 18

## Set 2


1. 42
2. 6
3. 20
4. 2
5. 9
6. 11 & 14
7. 8 & 2
8. 10 & 22
9. 37
10. 6
11. 13 & 8
12. 12 & 24





# SET I

One step addition and  
subtraction word  
problems



## Task Card #1

At the zoo, Sarah saw 26 zebras in the field. When she came back later she only saw 18. How many zebras left the field?



MCC.2.OA.1

©Brianna Johnson 2015

## Task Card #2

John was watching the flamingos at the zoo. 39 of the flamingos had one leg up. 22 flamingos did not. How many total flamingos were at the zoo?



MCC.2.OA.1

©Brianna Johnson 2015

## Task Card #3

Anna got to feed the peacocks at the zoo! Peacocks love to eat berries. She got 45 berries to feed them. The zookeeper gave her 29 more berries to add to her pile. How many berries does she have now?



MCC.2.OA.1

©Brianna Johnson 2015

## Task Card #4

Bob's family was going to the zoo. The zoo was 52 miles away. They stopped to eat after 34 miles. How many more miles did they have left to drive?




MCC.2.OA.1

©Brianna Johnson 2015



## Task Card #5

Sarah was catching ladybugs. 47 of the ladybugs had big spots. 65 of the ladybugs had small spots. How many ladybugs did she catch in all?




MCC.2.OA.I

©Brianna Johnson 2015

## Task Card #6

Josh was looking at caterpillars in science class. 40 of the caterpillars were green and 17 of the caterpillars were yellow. What is the difference between yellow and green caterpillars?




MCC.2.OA.I

©Brianna Johnson 2015

## Task Card #7

Ann wants to catch 50 fireflies in a jar. She already has 3 fireflies. How many does she still need to catch?




MCC.2.OA.I

©Brianna Johnson 2015

## Task Card #8

Dan and Chris have grasshoppers as pets. Dan has 27 grasshoppers and Chris has 17 grasshoppers. How many do they have altogether?



MCC.2.OA.I

©Brianna Johnson 2015

## Task Card #9

Spring came and the polar bears were waking up from hibernation. There were 72 polar bears in the den and 34 woke up. How many polar bears were still hibernating?




MCC.2.OA.I

©Brianna Johnson 2015

## Task Card #10

The walrus pups were swimming in the ocean. They swam 32 miles in the morning and 19 miles in the afternoon. What is the sum of the miles they swam?




MCC.2.OA.I

©Brianna Johnson 2015

## Task Card #11

The seals were catching fish for their dinner. One group of seals caught 38 fish. The other group of fish caught 19 fish. How many more fish did the first group catch?



MCC.2.OA.I

©Brianna Johnson 2015

## Task Card #12

The huskies were playing in the snow. The older huskies were 36 inches tall. The younger huskies were only 18 inches tall. How much taller are the older huskies?




MCC.2.OA.I

©Brianna Johnson 2015



# SET 2

Two step addition and  
subtraction word  
problems



## Task Card #1

Lilly was going camping with the girl scouts. 47 girls were going and 35 moms were going. If 40 people already have tents,



how many more tents do they need?

MCC.2.OA.1

©Brianna Johnson 2015

## Task Card #2

On their camping trip, 6 girls had pink backpacks and 8 girls had blue backpacks. If there were 20 backpacks in all, then how many girls had yellow backpacks?



MCC.2.OA.1

©Brianna Johnson 2015

## Task Card #3

On a camping trip, the boys roasted 5 marshmallows and the dads roasted 10 marshmallows. The girls scouts roasted 5 more than the boys and dads combined. How many marshmallows did the girl scouts roast?



MCC.2.OA.1

©Brianna Johnson 2015

## Task Card #4

The boys had a fishing competition on the camping trip. Team Red caught 4 trout and 9 bass. Team Blue caught 8 trout and 7 bass. How many more fish did Team Blue catch?




MCC.2.OA.1

©Brianna Johnson 2015

## Task Card #5

Amy and Josh were on an owl scavenger hunt. They had to find 15 owls. Amy found 4 owls and Josh found 2 owls. How many more owls did they still need to find?



MCC.2.OA.1

©Brianna Johnson 2015

## Task Card #6

In the morning, Carl was watching animals. 6 moose were standing with 5 deer. How many animals did he see? In the afternoon he saw 3 rabbits. How many animals did Carl see all day?



MCC.2.OA.1

©Brianna Johnson 2015

## Task Card #7

Joe was looking at the stuffed animals in the zoo store. He had 10\$ to spend. He bought a penguin stuffed animal for 3\$ and a tiger stuffed animal for 5\$. How much money did he spend? How much changed did he have left?




MCC.2.OA.1

©Brianna Johnson 2015

## Task Card #8

Ben was feeding ducks at the pond. There were 3 mama ducks and 7 baby ducks. How many ducks did he feed? Later, 12 more ducks showed up, how many total ducks did Ben feed?



MCC.2.OA.1

©Brianna Johnson 2015

## Task Card #9

The monkeys escaped from the zoo!  
There were 54 monkeys missing.  
One zookeeper found 7  
of them. The other  
zookeeper found 10 of  
them. How many more  
monkeys did they need to  
find?



MCC.2.OA.1

©Brianna Johnson 2015

## Task Card #10

The feeding area for the pandas  
is 12 feet long. The bamboo takes  
up 4 feet and the water takes up  
2 feet. How much room is left in  
the feeding area?

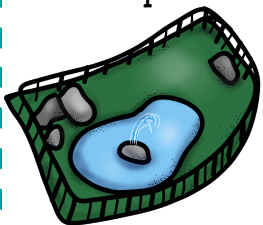


MCC.2.OA.1

©Brianna Johnson 2015

## Task Card #11

The water fountain in the park is 67  
degrees at night, 72 degrees in the  
morning, and 80 degrees during the day.  
What is the difference between the day  
temperature and night temperature?  
What is the difference  
between the day  
temperature and morning  
temperature?



MCC.2.OA.1

©Brianna Johnson 2015

## Task Card #12

In the snake habitat, 6 snakes were  
on the bottom heat rock and 6  
snakes were on the top heat rock.  
How many snakes were on the the  
heat rocks? 12 snakes were on the  
branches. How  
many total snakes  
were in the habitat?



MCC.2.OA.1


©Brianna Johnson 2015



# SET I


One step addition and  
subtraction word  
problems

BLACK LINE



## Task Card #1

At the zoo, Sarah saw 26 zebras in the field. When she came back later she only saw 18. How many zebras left the field?




MCC.2.OA.1

©Brianna Johnson 2015

## Task Card #2

John was watching the flamingos at the zoo. 39 of the flamingos had one leg up. 22 flamingos did not. How many total flamingos were at the zoo?




MCC.2.OA.1

©Brianna Johnson 2015

## Task Card #3

Anna got to feed the peacocks at the zoo! Peacocks love to eat berries. She got 45 berries to feed them. The zookeeper gave her 29 more berries to add to her pile. How many berries does she have now?

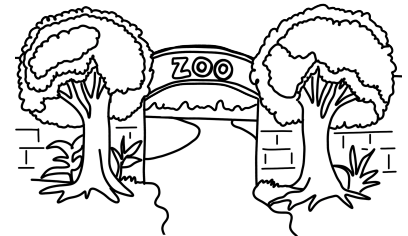


MCC.2.OA.1

©Brianna Johnson 2015

## Task Card #4

Bob's family was going to the zoo. The zoo was 52 miles away. They stopped to eat after 34 miles. How many more miles did they have left to drive?




MCC.2.OA.1

©Brianna Johnson 2015



## Task Card #5

Sarah was catching ladybugs. 47 of the ladybugs had big spots. 65 of the ladybugs had small spots. How many ladybugs did she catch in all?




MCC.2.OA.I

©Brianna Johnson 2015

## Task Card #6

Josh was looking at caterpillars in science class. 40 of the caterpillars were green and 17 of the caterpillars were yellow. What is the difference between yellow and green caterpillars?




MCC.2.OA.I

©Brianna Johnson 2015

## Task Card #7

Ann wants to catch 50 fireflies in a jar. She already has 3 fireflies. How many does she still need to catch?




MCC.2.OA.I

©Brianna Johnson 2015

## Task Card #8

Dan and Chris have grasshoppers as pets. Dan has 27 grasshoppers and Chris has 17 grasshoppers. How many do they have altogether?



MCC.2.OA.I

©Brianna Johnson 2015

## Task Card #9

Spring came and the polar bears were waking up from hibernation. There were 72 polar bears in the den and 34 woke up. How many polar bears were still hibernating?




MCC.2.OA.I

©Brianna Johnson 2015

## Task Card #10

The walrus pups were swimming in the ocean. They swam 32 miles in the morning and 19 miles in the afternoon. What is the sum of the miles they swam?




MCC.2.OA.I

©Brianna Johnson 2015

## Task Card #11

The seals were catching fish for their dinner. One group of seals caught 38 fish. The other group of fish caught 19 fish. How many more fish did the first group catch?



MCC.2.OA.I

©Brianna Johnson 2015

## Task Card #12

The huskies were playing in the snow. The older huskies were 36 inches tall. The younger huskies were only 18 inches tall. How much taller are the older huskies?



MCC.2.OA.I


©Brianna Johnson 2015



# SET 2

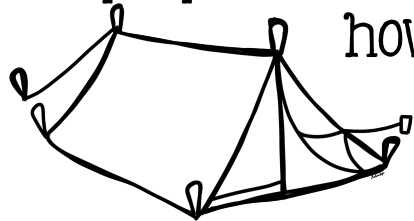
Two step addition and  
subtraction word  
problems

BLACK LINE



## Task Card #1

Lilly was going camping with the girl scouts. 47 girls were going and 35 moms were going. If 40 people already have tents,




how many more tents do they need?

MCC.2.OA.1

©Brianna Johnson 2015

## Task Card #2

On their camping trip, 6 girls had pink backpacks and 8 girls had blue backpacks. If there were 20 backpacks in all, then how many girls had yellow backpacks?




MCC.2.OA.1

©Brianna Johnson 2015

## Task Card #3

On a camping trip, the boys roasted 5 marshmallows and the dads roasted 10 marshmallows. The girls scouts roasted 5 more than the boys and dads combined. How many marshmallows did the girl scouts roast?



MCC.2.OA.1

©Brianna Johnson 2015

## Task Card #4

The boys had a fishing competition on the camping trip. Team Red caught 4 trout and 9 bass. Team Blue caught 8 trout and 7 bass. How many more fish did Team Blue catch?




MCC.2.OA.1

©Brianna Johnson 2015

## Task Card #5

Amy and Josh were on an owl scavenger hunt. They had to find 15 owls. Amy found 4 owls and Josh found 2 owls. How many owls did they still need to find?




MCC.2.OA.1

©Brianna Johnson 2015

## Task Card #6

In the morning, Carl was watching animals. 6 moose were standing with 5 deer. How many animals did he see? In the afternoon he saw 3 rabbits. How many animals did Carl see all day?




MCC.2.OA.1

©Brianna Johnson 2015

## Task Card #7

Joe was looking at the stuffed animals in the zoo store. He had 10\$ to spend. He bought a penguin stuffed animal for 3\$ and a tiger stuffed animal for 5\$. How much money did he spend? How much changed did he have left?




MCC.2.OA.1

©Brianna Johnson 2015

## Task Card #8

Ben was feeding ducks at the pond. There were 3 mama ducks and 7 baby ducks. How many ducks did he feed? Later 12 more ducks showed up, how many total ducks did Ben feed?




MCC.2.OA.1

©Brianna Johnson 2015

## Task Card #9

The monkeys escaped from the zoo!  
There were 54 monkeys missing.

One zookeeper found 7  
of them. The other  
zookeeper found 10 of  
them. How many more  
monkeys did they need to  
find?




MCC.2.OA.1

©Brianna Johnson 2015

## Task Card #10

The feeding area for the pandas  
is 12 feet long. The bamboo takes  
up 4 feet and the water takes up  
2 feet. How much room is left in  
the feeding area?



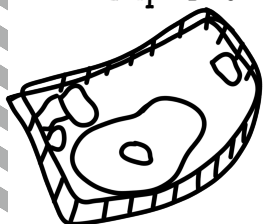
MCC.2.OA.1

©Brianna Johnson 2015

## Task Card #11

The water fountain in the park is 67  
degrees at night, 72 degrees in the  
morning, and 80 degrees during the day.  
What is the difference between the day  
temperature and night temperature?

What is the difference  
between the day  
temperature and morning  
temperature?

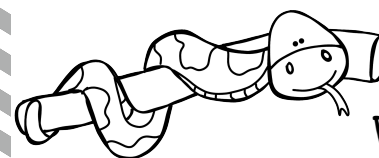


MCC.2.OA.1

©Brianna Johnson 2015

## Task Card #12

In the snake habitat, 6 snakes were  
on the bottom heat rock and 6  
snakes were on the top heat rock.  
How many snakes were on the the  
heat rocks? 12 snakes were on the  
branches. How  
many total snakes  
were in the habitat?



MCC.2.OA.1

©Brianna Johnson 2015

# 2nd Grade

## Addition and Subtraction Task Cards

Thank you for your download!

Click here for my newest math pack!:

<http://bit.ly/1ReFK8z>

### Graphics Used:

Sonya Dehart Design

<https://www.teacherspayteachers.com/Store/Sonya-Dehart-Design>

Educlips

<https://www.teacherspayteachers.com/Store/Educlip>

RebeccaB Designs

<https://www.teacherspayteachers.com/Store/RebeccaB-Designs>

A Little Piece of Africa

<https://www.teacherspayteachers.com/Store/A-Little-Piece-Of-Africa>

Melonheadz

<https://www.teacherspayteachers.com/Store/Melonheadz>

Fonts Used:



I would love to hear  
your feedback!